




FARM YARD MATH CHALLENGE



There is farmland near Clavet that is being developed to house a number of animals. Your job is to design pens for all the animals on the farm.

Important Information for Planning



The farmland has a perimeter of 100m.



The 5 pigs need a pen that has a perimeter of 8m.



The 3 horses need a pen that has a perimeter of 16m.




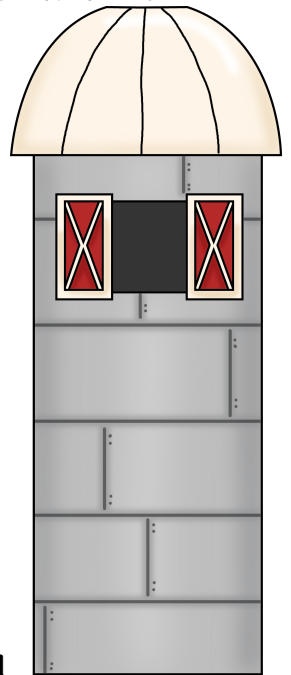
The 6 cows need a pen that has a perimeter of 24m



The 4 sheep need a pen that has a perimeter of 20m.



The 8 chickens need a pen that has a perimeter of 26m.



© Chad Williams

